

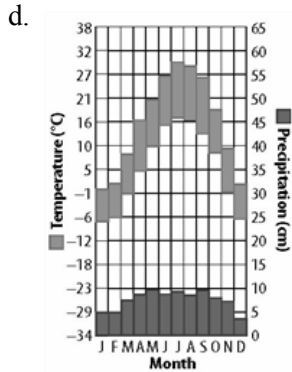
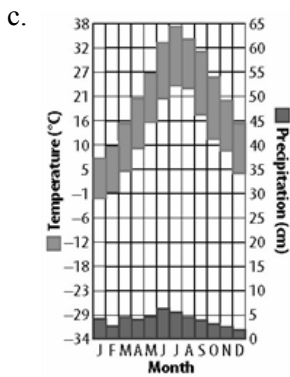
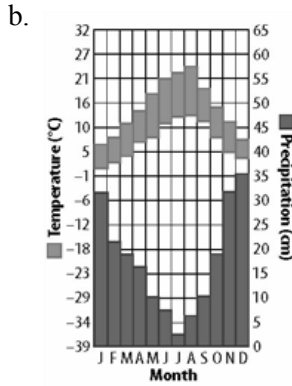
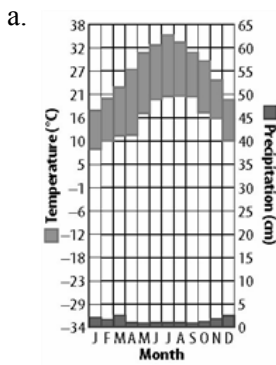
Name _____
:

Class: _____ Date: _____

Ch. 19 Study Guide

Indicate whether the statement is true or false.

1. Ecological succession can begin when seeds are carried to bare areas by birds or the wind.
 - a. True
 - b. False
2. Nonliving things, such as rock, soil, and air are all part of an ecosystem.
 - a. True
 - b. False
3. Label each graph with the correct biome it represents. Hint, use your book.



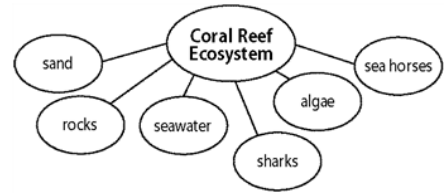
4. Describe the process of secondary succession.

Name _____
: _____

Class: _____ Date: _____

Ch. 19 Study Guide

5. On the coral reef ecosystem figure shown, list the abiotic and biotic factors.



6. Which biome has weather that is warm and wet year-round?

7. Define Climax Community

Fill in the table below:

Biome	Description	Biodiversity	Human Impacts
Desert			
Grassland			
Tropical Rain Forest			
Temperate Rain Forest			
Temperate Deciduous Forest			
Taiga			
Tundra			

8. How do people use water from freshwater ecosystems?

Name _____
:

Class: _____ Date: _____

Ch. 19 Study Guide

9. Define Biotic Factor. Define Abiotic Factor.

10. Define pioneer species